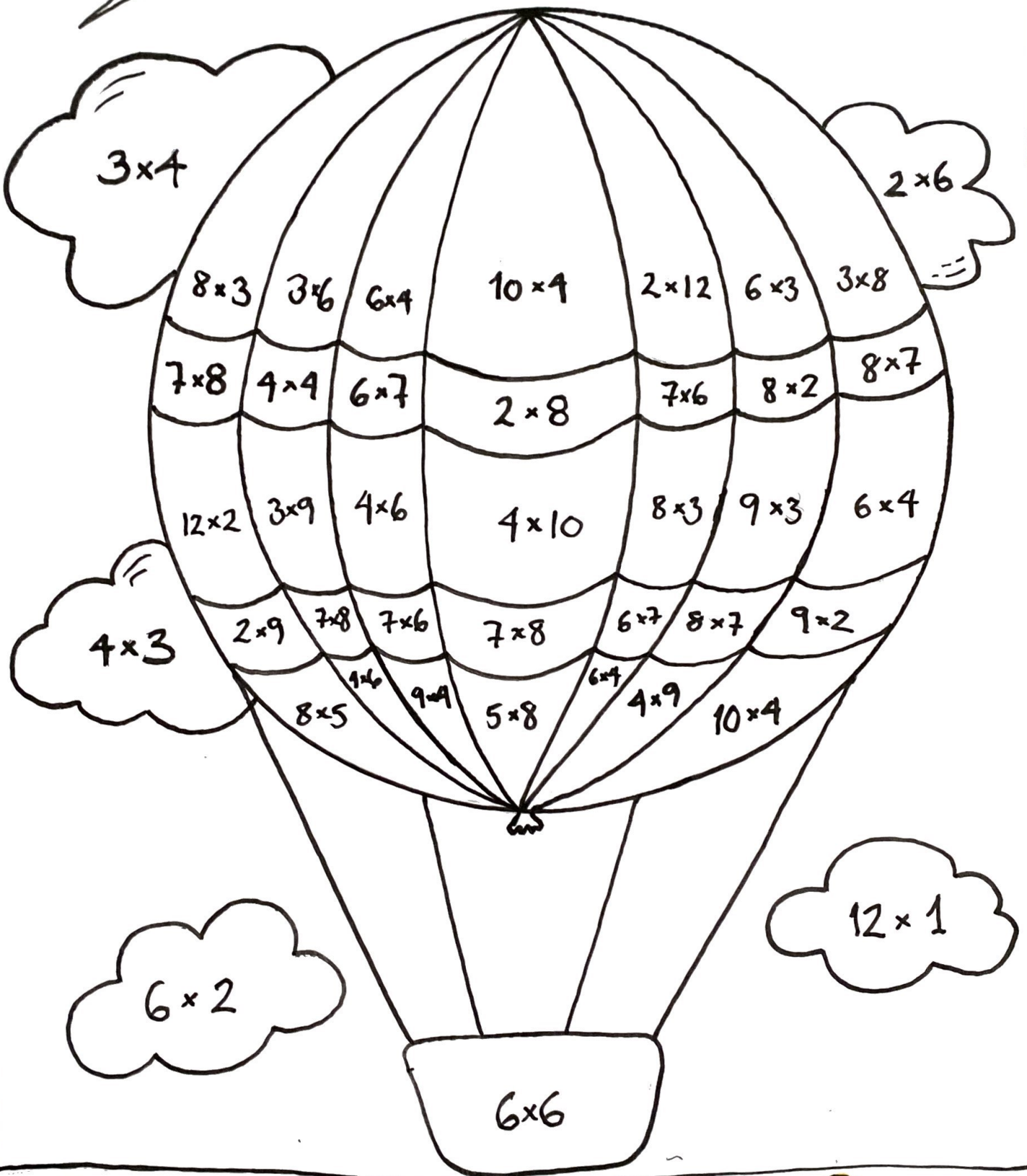


FARV EFTER TAL

© MARIASNATURBOERN



- | | | | |
|--|--|---|--|
|  = 12 |  = 24 |  = 18 |  = 56 |
|  = 16 |  = 40 |  = 36 |  = 42 |



BROKER

@MARIASNATURBOERN

$$\frac{1}{4}$$

FARVELÆG



$$\frac{3}{4}$$



$$\frac{4}{5}$$

FARVELÆG:



$$\frac{2}{5}$$



FARVELÆG:

$$\frac{4}{8}$$



$$\frac{6}{8}$$



FARVELÆG:

$$\frac{3}{6}$$



$$\frac{2}{9}$$



FARVELÆG:

$$\frac{10}{16}$$



$$\frac{8}{20}$$



FARVELÆG:

$$\frac{7}{8}$$



$$\frac{4}{9}$$



FARVELÆG:

$$\frac{3}{7}$$


$$\frac{7}{10}$$



FARVELÆG:

$$\frac{12}{16}$$

$$\frac{5}{6}$$



MULTIPLIKATION

@MARIASNATURBOERN

HVIS EN IS KOSTER
30 KR, HVAD KOSTER
3 IS SÅ?

EN BLUSE
KOSTER 200 KR
DU SKAL KØBE
2 BLUSER, HVAD
SKAL DU BETALE?

EN BLYANT
KOSTER 40 KR.
HVAD KOSTER 4
BLYANTER SÅ?

EN SMÅKAGE
KOSTER 15 KR.
HVOR MEGET
KOSTER 3
SMÅKAGER?

EN CYKEL
KOSTER 1.000 KR
HVOR MEGET
KOSTER 5
CYKLER?

ET PAR BUKSER
KOSTER 100 KR.
HVOR MEGET SKAL
DU BETALE FOR
6 PAR BUKSER?

ET SPIL KOSTER
50 KR. HVOR
MEGET KOSTER
4 SPIL?

DU KAN FÅ EN
SLIKPOSE FOR
10 KR, MEN DU
SKAL BRUG 8.
HVOR MEGET SKAL
DU BETALE FOR 8
SLIKPOSER?

DU ØNSKER DIG
3 SOMMERFUGLE.
1 KOSTER 40
KR. HVOR MEGET
SKAL DU BETALE
FOR 3 SOMMER-
FUGLE?

DU VIL KØBE BLOMSTER
TIL DIN MOR OG
BEDSTEMOR.
HVOR MEGET KOSTER
2 BUKETTER, NÅR
1 KOSTER 100 KR?

ET PAR SØKKER
KOSTER 20 KR.
HVOR MEGET
KOSTER 7 PAR?

EN HUND
KOSTER 10.000 KR.
HVOR MEGET
KOSTER 2 HUNDE?

TABELLER

UDFYLD DET DER MANGLER

